




NAME _____

DATE _____

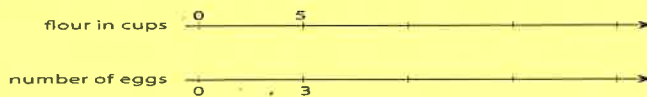
PERIOD _____

Unit 2, Lesson 6: Practice Problems

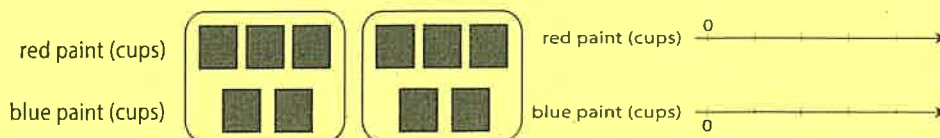
1. A particular shade of orange paint has 2 cups of yellow paint for every 3 cups of red paint. On the double number line, circle the numbers of cups of yellow and red paint needed for 3 batches of orange paint.



2. This double number line diagram shows the amount of flour and eggs needed for 1 batch of cookies.



- 3.
- Complete the diagram to show the amount of flour and eggs needed for 2, 3, and 4 batches of cookies.
 - What is the ratio of cups of flour to eggs?
 - How much flour and how many eggs are used in 4 batches of cookies?
 - How much flour is used with 6 eggs?
 - How many eggs are used with 15 cups of flour?
4. Here is a representation showing the amount of red and blue paint that make 2 batches of purple paint.
- On the double number line, label the tick marks to represent amounts of red and blue paint used to make batches of this shade of purple paint.



- How many batches are made with 12 cups of red paint?
- How many batches are made with 6 cups of blue paint?



NAME _____

DATE _____


PERIOD _____

5. Diego estimates that there will need to be 3 pizzas for every 7 kids at his party. Select all the statements that express this ratio.

- A. The ratio of kids to pizzas is 7:3.
- B. The ratio of pizzas to kids is 3 to 7.
- C. The ratio of kids to pizzas is 3:7.
- D. The ratio of pizzas to kids is 7 to 3.
- E. For every 7 kids there need to be 3 pizzas.

6.

- a. Draw a parallelogram that is not a rectangle that has an area of 24 square units. Explain or show how you know the area is 24 square units.



- b. Draw a triangle that has an area of 24 square units. Explain or show how you know the area is 24 square units.

